










St Uny CE Academy Weekly Home Learning

Class: Poldark



	Monday	Tuesday	Wednesday	Thursday	Friday																				
1	<div>Morning Motivation</div> <div>Joe Wicks morning activities Monday, Wednesday, Friday (9am)</div> <div>https://www.youtube.com/playlist?list=PLYCLoPd4VxBuPuwfVuS-OBtK_kZqJCX-b</div> <div>Tuesday & Thursday – get active together.</div>																								
2	<div>Spellings</div> <div>Refer to weekly spelling list and practice spellings.</div>	<div>Spellings</div> <div>Refer to weekly spelling list and practice spellings.</div>	<div>Spellings</div> <div>Refer to weekly spelling list and practice spellings.</div>	<div>Spellings</div> <div>Refer to weekly spelling list and practice spellings.</div>	<div>Spellings</div> <div>Spelling test.</div>																				
3 Writing	<div>'The Write Stuff' virtual lesson link: 9.45am https://www.youtube.com/c/TheTrainingSpace</div> <div>Alternative task:</div> <div>Write a description of a Tiger. 10 sentences. Please remember your BASICS, interesting adjectives, and similes.</div> <div>You can select whether you want to do the virtual lesson or the alternative task.</div>	<div>'The Write Stuff' virtual lesson link: 9,45am https://www.youtube.com/c/TheTrainingSpace</div> <div>Alternative task:</div> <div>Write down 10 interesting facts about Lions. Think about their diet, habitat and special features. Can you include a labelled diagram?</div> <div>You can select whether you want to do the virtual lesson or the alternative task.</div>	<div>'The Write Stuff' virtual lesson link: 9.45am https://www.youtube.com/c/TheTrainingSpace</div> <div>Alternative task:</div> <div>Write a poem based on a Cheetah. This could be a free verse poem, a rhyming poem, acrostic poem, shape poem or something different like a Haiku, limerick or a riddle.</div> <div>You can select whether you want to do the virtual lesson or the alternative task.</div>	<div>'The Write Stuff' virtual lesson link: 9.45am https://www.youtube.com/c/TheTrainingSpace</div> <div>Alternative task:</div> <div>Create a poster explaining the Savanna habitats. Write at least 5 sentences about the plants and animals that live there. Include a section on how Big Cats hunt for their prey.</div> <div>You can select whether you want to do the virtual lesson or the alternative task.</div>	<div>'The Write Stuff' virtual lesson link: 9.45am https://www.youtube.com/c/TheTrainingSpace</div> <div>Alternative task:</div> <div>https://www.youtube.com/watch?v=BXgW9UCgpc8 Recount the story a tiger came to tea and create your own story map with sentences to accompany each part of the story. Then illustrate.</div> <div>You can select whether you want to do the virtual lesson or the alternative task.</div>																				
4 Maths	<div>https://whiterosemaths.com/homelearning/year-2/week-5/</div> <div>Click on lesson: Fact Families.</div> <div>Addition and Subtraction Bonds to 20</div> <div>1. Watch the Video above.</div> <div>2. Complete the tasks below</div> <div><div>Complete each family of facts. 2 8 6 ____ + ____ = ____ ____ + ____ = ____ ____ - ____ = ____ ____ - ____ = ____</div><div>Complete each family of facts. 10 7 3 ____ + ____ = ____ ____ + ____ = ____ ____ - ____ = ____ ____ - ____ = ____</div></div> <div>1. Evie has 14 pets. Using +, - and =, write the 4 calculations that show how many Evie has.</div> <div><div>14</div><div></div><div></div></div>	<div>https://whiterosemaths.com/homelearning/year-2/week-5/</div> <div>Click on lesson: Check Calculations</div> <div>Checking Calculations</div> <div>1. Watch the Video above.</div> <div>2. Complete the tasks below and tick or cross if the calculations are correct.</div> <div><table><tr><td>12-8=3</td><td></td><td>16=8+8</td><td></td></tr><tr><td>6+9=14</td><td></td><td>15+5=19</td><td></td></tr><tr><td>10-7=4</td><td></td><td>4+14=20</td><td></td></tr></table></div> <div>Which calculation is correct?</div> <div>Which calculation is the odd one out? Use the ten frames below to help.</div> <div><div><div><div></div><div></div><div></div><div></div><div></div><div></div><div></div><div></div><div></div><div></div></div><div><div></div><div></div><div></div><div></div><div></div><div></div><div></div><div></div><div></div><div></div></div></div><div>A</div><div>7 + 5 = 12</div><div>B</div><div>12 + 5 = 17</div><div>C</div><div>12 - 7 = 5</div></div>	12-8=3		16=8+8		6+9=14		15+5=19		10-7=4		4+14=20		<div>https://whiterosemaths.com/homelearning/year-2/week-5/</div> <div>Click on lesson: Compare number sentences</div> <div>Compare number sentences</div> <div>1. Watch the Video above.</div> <div>2. Complete the tasks below.</div> <div>Add in the symbols to make these correct > < or = Remember to draw tens and ones under each number.</div> <div><div>12 + 4</div><div></div><div>11 + 5</div></div> <div><div>19 - 4</div><div></div><div>20 - 4</div></div> <div><div>9 + 4</div><div></div><div>8 + 4</div></div> <div><div>14 - 7</div><div></div><div>15 - 8</div></div>	<div>https://whiterosemaths.com/homelearning/year-2/week-5/</div> <div>Click on lesson: Related Facts</div> <div>Compare number sentences</div> <div>1. Watch the Video above.</div> <div>2. Complete the tasks below</div> <div>Match the number sentences to the correct answer.</div> <div><div>3 + 2 =</div><div>4</div><div>30 + 20 =</div><div>60</div></div> <div><div>8 - 2 =</div><div>8</div><div>90 - 50 =</div><div>50</div></div> <div><div>9 - 5 =</div><div>6</div><div>80 - 20 =</div><div>40</div></div> <div><div>7 + 1 =</div><div>5</div><div>70 + 10 =</div><div>80</div></div> <div>Miss Smitheram buys two chocolates. Can you write the related facts.</div> <div><div>60p</div><div></div><div>30p</div><div></div><div></div><div>+</div><div></div><div>=</div><div></div></div> <div>How much will the sweets cost altogether?</div>	<div>Times tables Day</div> <div>1.Chant your 2-x table out loud</div> <div>2. Play hit the button to test your 2-x table. Play question and answer versions. https://www.topmarks.co.uk/maths-games/hit-the-button</div> <div>3. Write out your 2 times table. For example: 1x 2= 2 x 2=</div> <div>4. Answer these questions</div> <div><table><tr><td>8x2=</td><td>=4x2</td></tr><tr><td>5x2=</td><td>____ x 2=10</td></tr><tr><td>3x2=</td><td>____ x 2 =12</td></tr><tr><td>=6x2</td><td>____x 2=20</td></tr></table></div>	8x2=	=4x2	5x2=	____ x 2=10	3x2=	____ x 2 =12	=6x2	____x 2=20
12-8=3		16=8+8																							
6+9=14		15+5=19																							
10-7=4		4+14=20																							
8x2=	=4x2																								
5x2=	____ x 2=10																								
3x2=	____ x 2 =12																								
=6x2	____x 2=20																								

	<p>Complete the number sentences below.</p> <div><div><div>17</div><div>512</div></div><div><div>12</div><div>+</div><div></div><div>=</div><div>17</div></div><div><div>5</div><div>+</div><div></div><div>=</div><div>17</div></div><div><div></div><div>-</div><div>5</div><div>=</div><div></div></div><div><div></div><div>-</div><div>12</div><div>=</div><div></div></div></div>	<p>Mr. Hoskins thinks that</p> <p>15+5=10</p> <p>Is he correct?</p> <p>Can you explain why?</p> <p>Prove it by drawing your answer.</p>	<p>Mr. Hoskins has drawn this number sentence?</p> <div><div><div></div><div></div></div><div><div></div><div></div><div></div><div></div></div><div><div></div><div></div></div><div><div></div><div></div><div></div><div></div></div></div> <p>2 + 6 > 2 + 7</p> <p>Is he correct? Convince me?</p>	<p>Spot the odd one out? Explain you answer.</p> <div><div>A.<div>2 + 3 = 5</div></div><div>B.<div><div>60</div><div>30</div><div>30</div></div></div><div>C.<div><div>50</div><div>3020</div></div></div><div>D.<div>3 + 2 = 5</div></div></div>	<p>5. Answer this word problem. DRAW YOUR MATHS</p> <p>Mrs. Palmer has 3 bags of with 2 sweets in each.</p> <p>How many sweets are there altogether?</p>
5 Readin g	<p>Reading</p> <p>20 minutes of reading with an adult. Make sure you log in reading record.</p> <p>Link to free online e-books: https://home.oxfordowl.co.uk/reading/free-ebooks/</p>	<p>Reading</p> <p>20 minutes of reading with an adult. Make sure you log in reading record.</p> <p>Link to free online e-books: https://home.oxfordowl.co.uk/reading/free-ebooks/</p>	<p>Reading</p> <p>20 minutes of reading with an adult. Make sure you log in reading record.</p> <p>Link to free online e-books: https://home.oxfordowl.co.uk/reading/free-ebooks/</p>	<p>Reading</p> <p>20 minutes of reading with an adult. Make sure you log in reading record.</p> <p>Link to free online e-books: https://home.oxfordowl.co.uk/reading/free-ebooks/</p>	<p>Reading</p> <p>20 minutes of reading with an adult. Make sure you log in reading record.</p> <p>Link to free online e-books: https://home.oxfordowl.co.uk/reading/free-ebooks/</p>
6 Project	<p>Weekly PROJECT -Geography</p> <p>THE SEVEN CONTINENTS</p> <p>Throughout the week your task is to create an information booklet filled with interesting facts, diagrams, and other information based on THE SEVEN CONTINENTS</p> <p>For this project you can use the internet, videos, and books to help you.</p> <p>This website is also excellent and will provide further inspiration: https://classroom.thenational.academy/units/seven-continents-cf8c</p> <p>Please try to cover and answer these key questions:</p> <ul style="list-style-type: none">What is a continent, and can you name them?What is Europe, Australia, Africa, Asia, North America, South America, and Antarctica like? (include pictures and maps if you can).Bonus Question: How is Alaska similar/different to Cornwall. <p>Don't forget to post anything you are super proud of on Google Classroom so we can celebrate your wonderful work together.</p> <p>You can also select on-going 'Chilli Challenge' homework tasks.</p> <div></div>				